

STD VI Maths

Angles

Assignment (i)

Instructions to the students : The notes provided must be copied to the maths copy & then do the Home Work in the same copy.

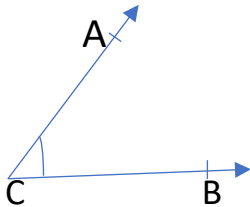
Things To Remember

- The figure formed by two rays with the same initial point is called an angle. The common initial point is called the vertex of the angle & the rays forming the angle are called its sides or arms.
- The standard unit for measuring an angle is degree , denoted by $^{\circ}$
- The instrument used for measuring angles is called a protractor.

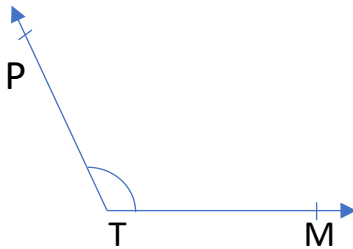
Home Work

Q1. Name each of the following angles. Also name the vertex & arms in each case;

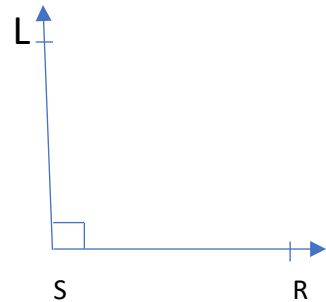
i)



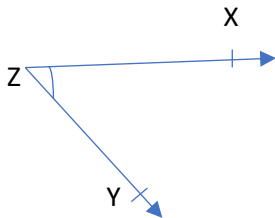
ii) P



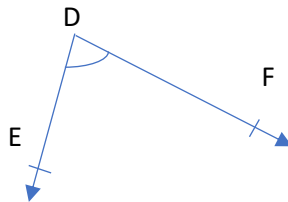
iii)




iv)



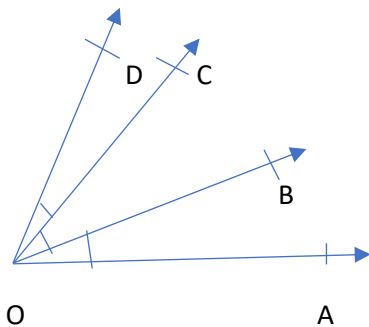
v)



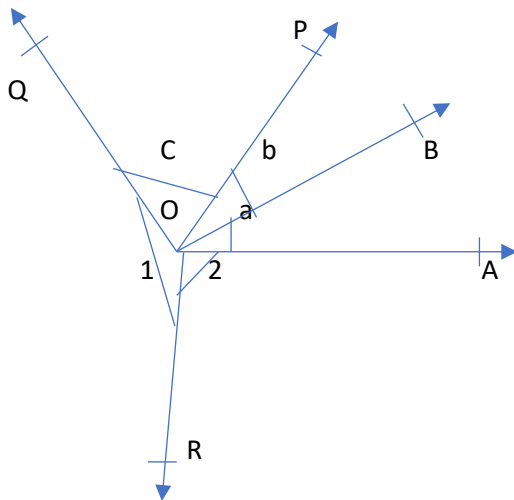
vi)



Q2. Name all the possible angles in the adjoining figure;

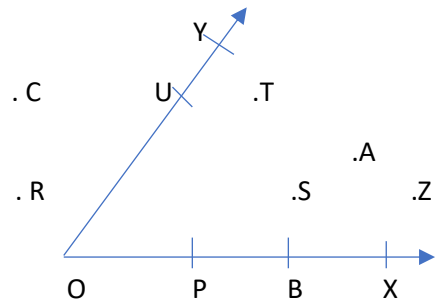


Q3. Name the angles shown , using capital letters;



Q4. In the adjoining figure ; name the points:

- i) On the angle ;
- ii) In the interior of the angle;
- iii) In the exterior of the angle



. L

. D